

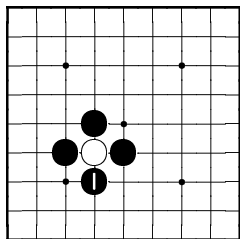
# My First Book of Go Exercises

## Solution Sheet

Leandro Soriano Marcolino

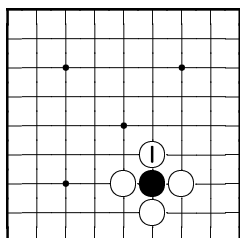
Page 6-7

Black to play. Capture.



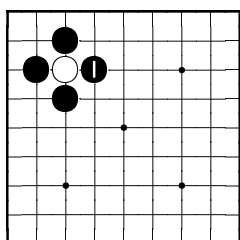
How many stones did you capture? 1

White to play. Capture.



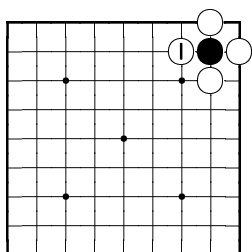
How many stones did you capture? 1

Black to play. Capture.



How many stones did you capture? 1

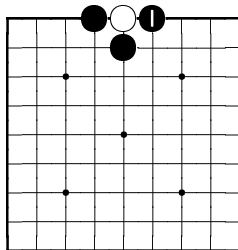
White to play. Capture.



How many stones did you capture? 1

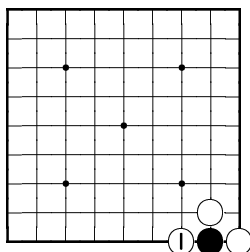
Page 8-9

Black to play. Capture.



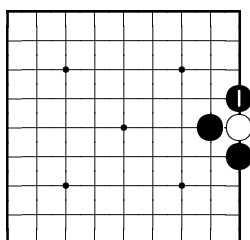
How many stones did you capture? 1

White to play. Capture.



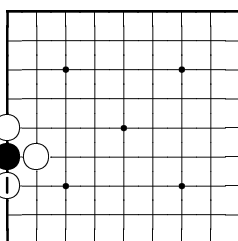
How many stones did you capture? 1

Black to play. Capture.



How many stones did you capture? 1

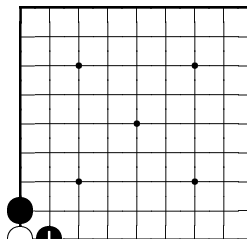
White to play. Capture.



How many stones did you capture? 1

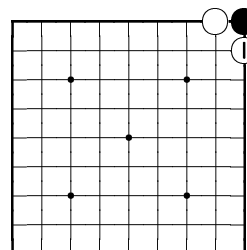
Page 10-11

Black to play. Capture.



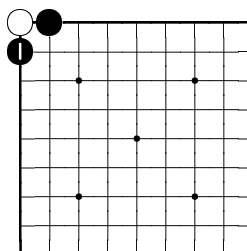
How many stones did you capture? 1

White to play. Capture.



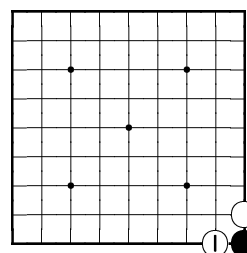
How many stones did you capture? 1

Black to play. Capture.



How many stones did you capture? 1

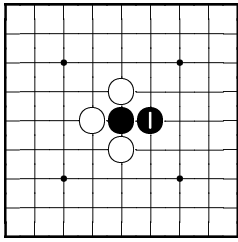
White to play. Capture.



How many stones did you capture? 1

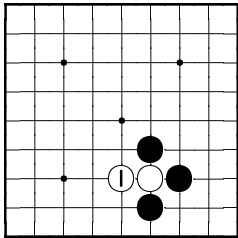
Page 12-13

Black to play. Defend.



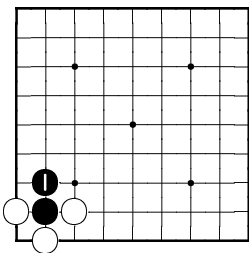
How many stones did you save?  
1

White to play. Defend.



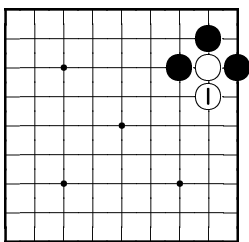
How many stones did you save?  
1

Black to play. Defend.



How many stones did you save?  
1

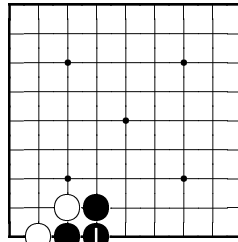
White to play. Defend.



How many stones did you save?  
1

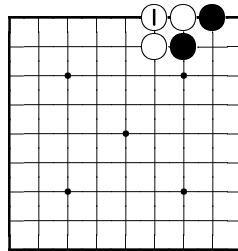
Page 14-15

Black to play. Defend.



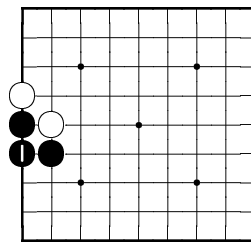
How many stones did you save?  
1

White to play. Defend.



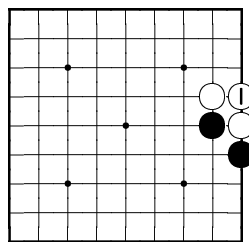
How many stones did you save?  
1

Black to play. Defend.



How many stones did you save?  
1

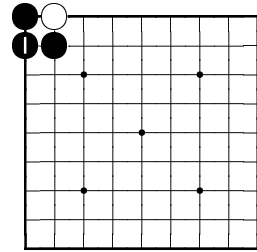
White to play. Defend.



How many stones did you save?  
1

Page 16

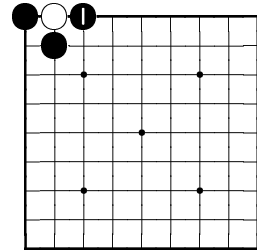
Black to play. Defend.



How many stones did you save?  
1

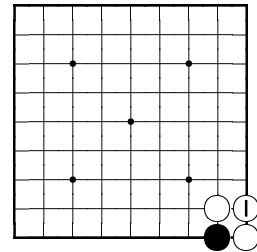
Or

Black to play. Defend.



How many stones did you save?  
1

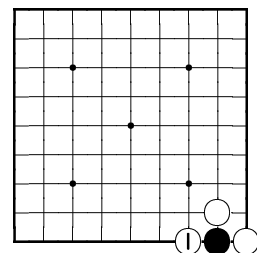
White to play. Defend.



How many stones did you save?  
1

Or

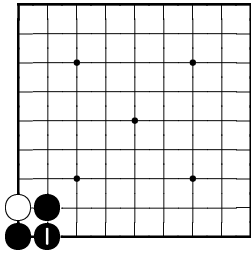
White to play. Defend.



How many stones did you save?  
1

Page 17

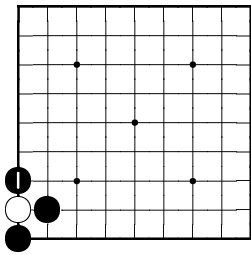
Black to play. Defend.



How many stones did you save?  
1

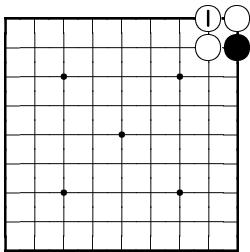
Or

Black to play. Defend.



How many stones did you save?  
1

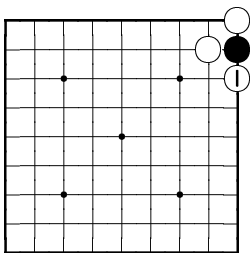
White to play. Defend.



How many stones did you save?  
1

Or

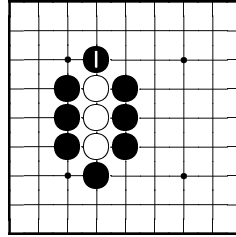
White to play. Defend.



How many stones did you save?  
1

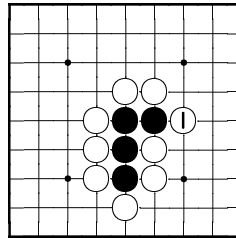
Page 18-19

Black to play. Capture.



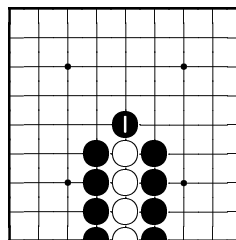
How many stones did you capture?  
3

White to play. Capture.



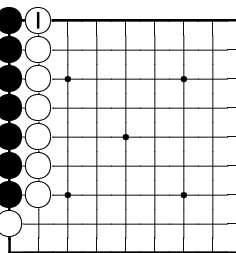
How many stones did you capture?  
4

Black to play. Capture.



How many stones did you capture?  
4

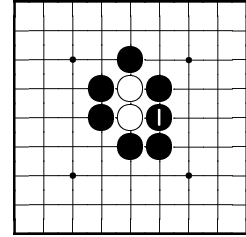
White to play. Capture.



How many stones did you capture?  
7

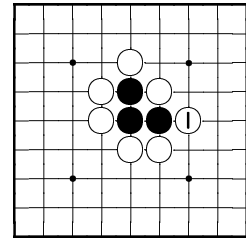
Page 20-21

Black to play. Capture.



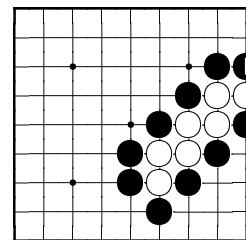
How many stones did you capture?  
2

White to play. Capture.



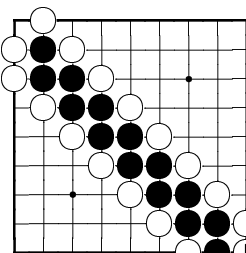
How many stones did you capture?  
3

Black to play. Capture.



How many stones did you capture?  
7

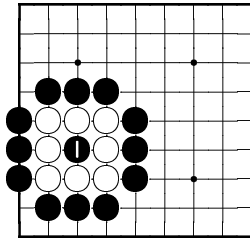
White to play. Capture.



How many stones did you capture?  
14

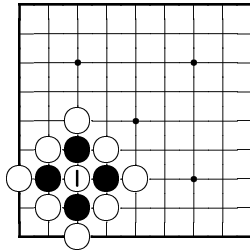
Page 22-23

Black to play. Capture.



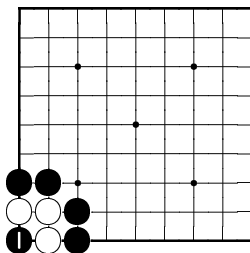
How many stones did you capture? 8

White to play. Capture.



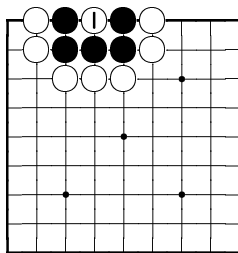
How many stones did you capture? 4

Black to play. Capture.



How many stones did you capture? 3

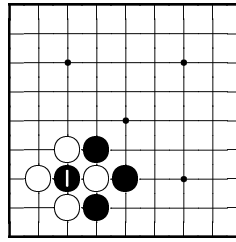
White to play. Capture.



How many stones did you capture? 5

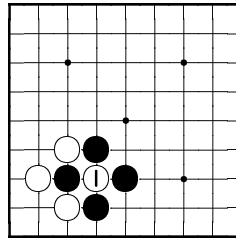
Page 24-25

Black to play. Capture.



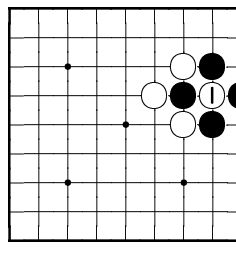
How many stones did you capture? 1

White to play. Capture.



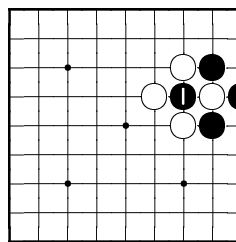
How many stones did you capture? 1

White to play. Capture.



How many stones did you capture? 1

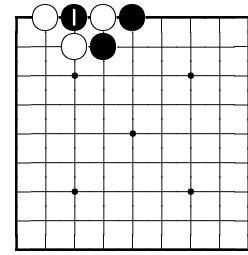
Black to play. Capture.



How many stones did you capture? 1

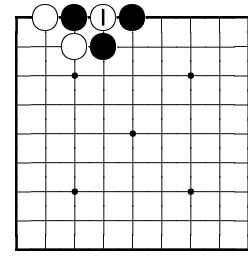
Page 26-27

Black to play. Capture.



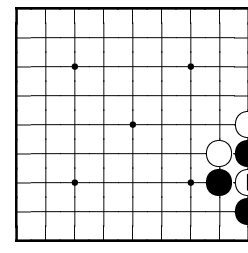
How many stones did you capture? 1

White to play. Capture.



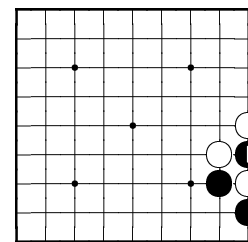
How many stones did you capture? 1

White to play. Capture.



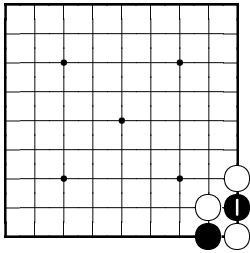
How many stones did you capture? 1

Black to play. Capture.



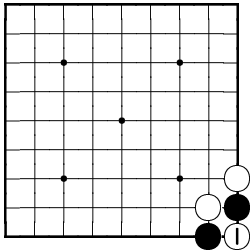
How many stones did you capture? 1

Black to play. Capture.



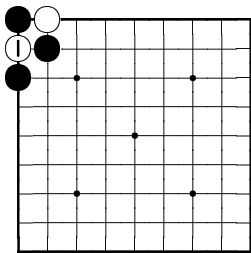
How many stones did you capture? 1

White to play. Capture.



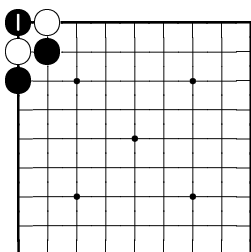
How many stones did you capture? 1

White to play. Capture.



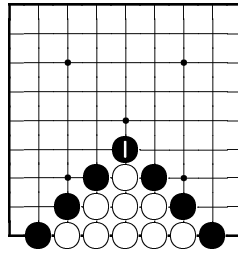
How many stones did you capture? 1

Black to play. Capture.



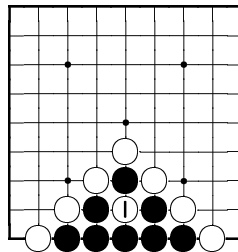
How many stones did you capture? 1

Black to play. Capture.



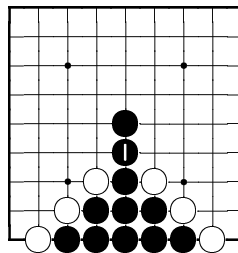
How many stones did you capture? 9

White to play. Capture.



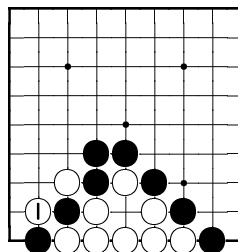
How many stones did you capture? 8

Black to play. Defend.



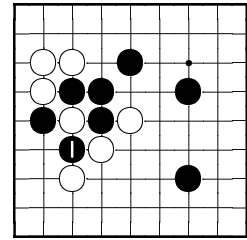
How many stones did you save? 9

White to play. Defend.



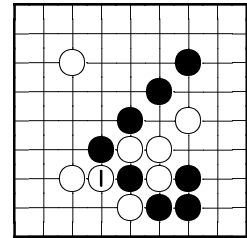
How many stones did you save? 7, 8 or 9 are possible answers, depending on the point of view.

Black to play. Capture.



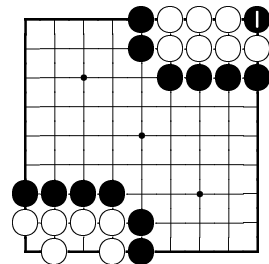
How many stones did you capture? 1

White to play. Capture.



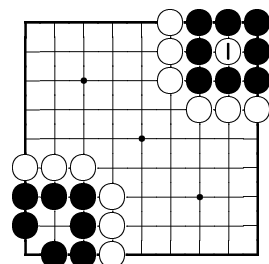
How many stones did you capture? 1

Black to play. Capture.



How many stones did you capture? 7

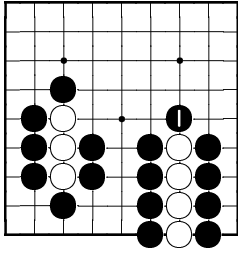
White to play. Capture.



How many stones did you capture? 8

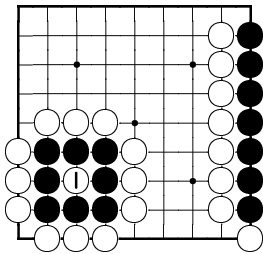
Page 35-36

Black to play. Capture the biggest group.



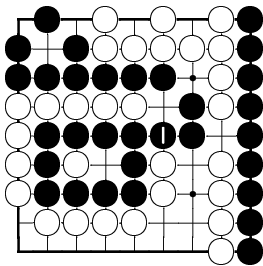
How many stones did you capture? 4

White to play. Capture the biggest group.



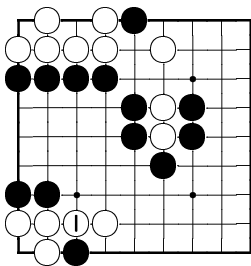
How many stones did you capture? 8

Black to play. Defend the biggest group.



How many stones did you save? 10

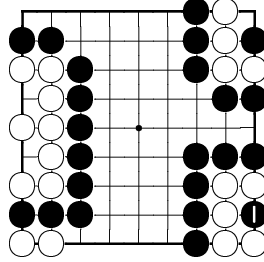
White to play. Defend the biggest group.



How many stones did you save? 4

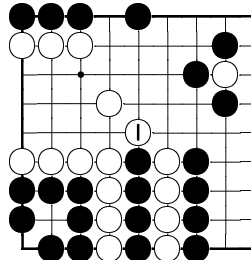
Page 37-38

Black to play. Capture the biggest group.



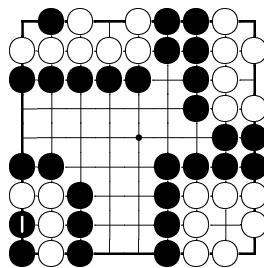
How many stones did you capture? 5

White to play. Capture the biggest group.



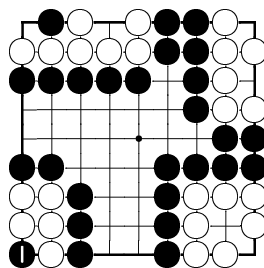
How many stones did you capture? 4

Black to play. Capture.



How many stones did you capture? 4

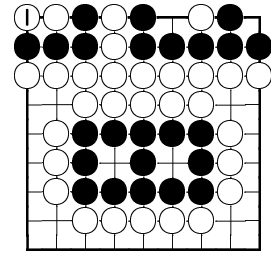
Black to play. Capture.



How many stones did you capture? 5

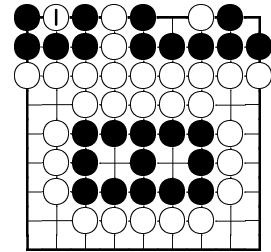
Page 39-40

White to play. Capture.



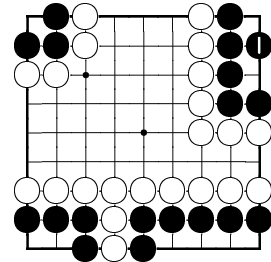
How many stones did you capture? 4

White to play. Capture.



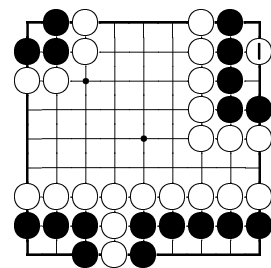
How many stones did you capture? 5

Black to play. Defend your group.



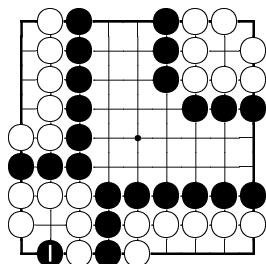
How many stones did you defend? 5

White to play. Kill 3 groups.



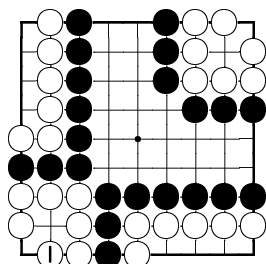
How many stones will be captured? 12

Black to play. Kill 1 group.



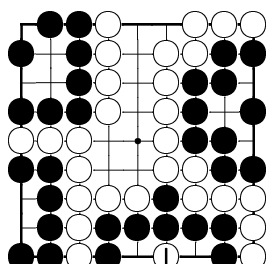
How many stones will be captured? 6

White to play. Defend your group.



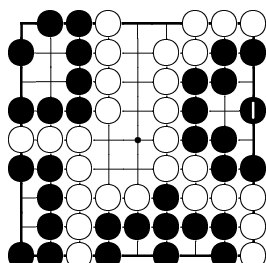
How many stones did you save? 6

White to play. Kill 2 groups.



How many stones will be captured? 14

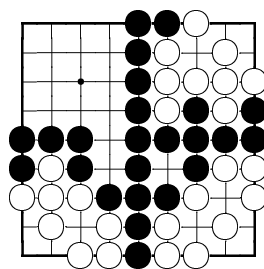
Black to play. Defend 1 group.



How many stones did you save? 9

In the following exercises, there are multiple different ways to organise the calculation, with the same final result. We only show examples.

### Count Territory

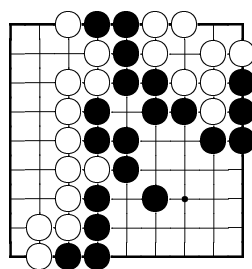


White has  $\underline{4} + \underline{4} + \underline{5} = \underline{13}$  points.

Black has  $\underline{4} \times \underline{4} + \underline{3} = \underline{19}$  points.

Black wins.

### Count Territory



White has  $\underline{7} \times \underline{2} + \underline{3} + \underline{3} = \underline{20}$  points.

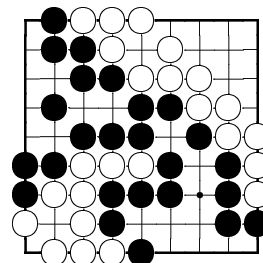
Black has  $\underline{4} \times \underline{3} + \underline{9} = \underline{21}$  points.

Or

Black has  $\underline{5} \times \underline{2} + \underline{11} = \underline{21}$  points.

Black wins.

### Count Score



White captures: ●

Black captures: ○○

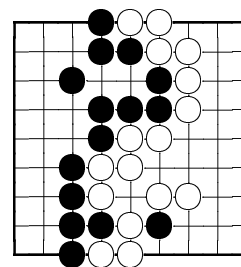
White has  $\underline{13} - \underline{2} + \underline{6.5} = \underline{17.5}$  points.

Black has  $\underline{19} - \underline{1} = \underline{18}$  points.

Black wins.

If you consider Komi as 7.5, then White has 18.5 points. Interestingly, in that rule set, White wins instead of Black!

### Count Score



White captures: ●

Black captures:

White has  $\underline{27} - \underline{0} + \underline{6.5} = \underline{33.5}$  points.

Black has  $\underline{24} - \underline{2} = \underline{22}$  points.

White wins.

If you consider Komi as 7.5, White has 34.5 points.